



Snow


Much

Fun!

Blizzard Bag Day 6

Name _____

Read the text below and answer the questions.



The moon travels around the Earth. It takes almost one month for the moon to get all the way around the Earth. The moon does not make its own light. We can see the moon at night because the sun's light reflects off of it. It looks like the moon changes shape in the sky because of the way the sun's light shines on it. These different shapes are called the moon phases. Take a look at the moon each night and watch it change.

1. What is this story about? _____

2. About how long does it take for the moon to travel around the Earth?

3. Does the moon give off its own light? _____

4. What makes the moon light up? _____

5. Why does the moon look like it's changing shapes? _____

WINTER WRITING-Brainstorming

Think about what you did on your snow day. Brainstorm some ideas.

If you get stuck.. Think about..

Who were you with?

What did you play?

How did you feel?



Where did you go?

Did you build anything?

What did you eat?

Did you help?

Write your ideas in the bubble



Now put your ideas in order.

FIRST	NEXT	LAST

WINTER WRITING - SLOPPY COPY

Use your brain storming page to write a story. Tell what you did on your snow day. Put your events in order. Use the words **FIRST, NEXT, and LAST.**

Making Words

How many words can you make from the word

WINTER

1. _____

2. _____

3. _____

4. _____

5. _____

6. _____


7. _____

8. _____

9. _____

10. _____


Write more words on the back!



Name _____

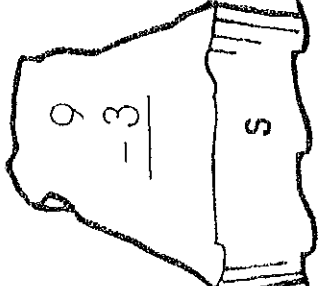
Iceberg Bird

Subtract.



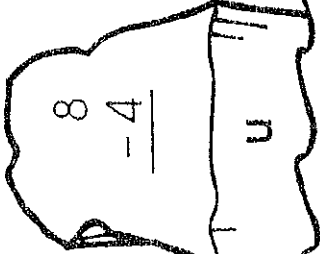
$$\begin{array}{r} 10 \\ - 0 \\ \hline \end{array}$$

i



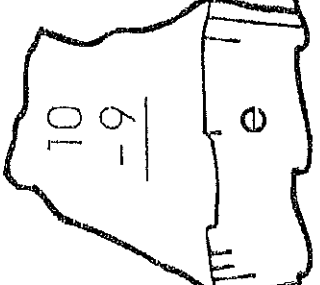
$$\begin{array}{r} 9 \\ - 3 \\ \hline \end{array}$$

s



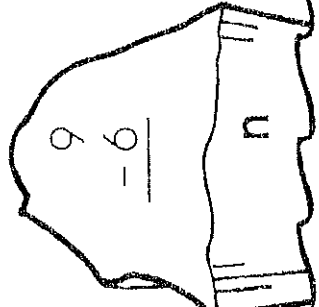
$$\begin{array}{r} 8 \\ - 4 \\ \hline \end{array}$$

u



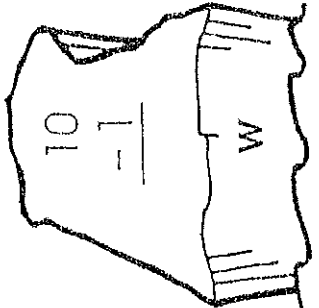
$$\begin{array}{r} 10 \\ - 9 \\ \hline \end{array}$$

e



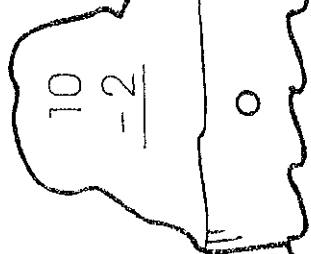
$$\begin{array}{r} 9 \\ - 6 \\ \hline \end{array}$$

n



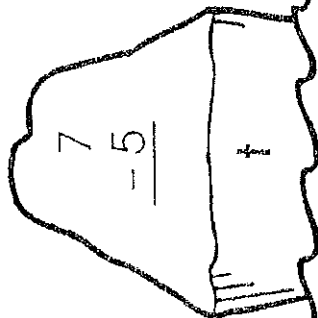
$$\begin{array}{r} 10 \\ - 1 \\ \hline \end{array}$$

w



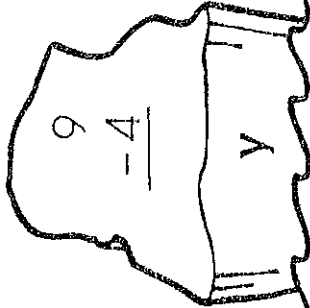
$$\begin{array}{r} 10 \\ - 2 \\ \hline \end{array}$$

o



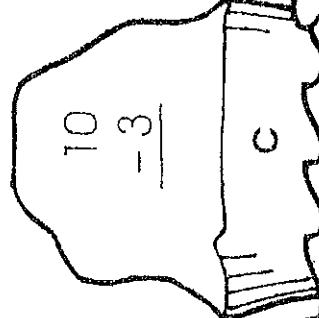
$$\begin{array}{r} 7 \\ - 5 \\ \hline \end{array}$$

t



$$\begin{array}{r} 9 \\ - 4 \\ \hline \end{array}$$

y



$$\begin{array}{r} 10 \\ - 3 \\ \hline \end{array}$$

c

Write the matching letter above each number to solve the riddle.



Riddle:

What do you say when you meet a penguin?

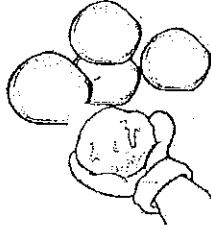
Answer:

3 10 7 1 2 8 6 3 8 9 5 8 4


Name: _____

Solve each problem and show your work. Then write your answer and label it in the answer box.

Joe made 8 snowballs. Then his brother made 10 more snowballs. How many snowballs did they have in all?



On Friday 7 girls went ice skating. Then 8 more girls came to join them. How many girls were there altogether?




Yesterday there were 7 blue birds in the yard. Then 6 more joined them. What is the total number blue birds in the yard?



Matt snowboarded down the hill 5 times in the morning and 9 times in the afternoon. How many times did Matt snowboard down the hill?



Blizzard Bag Physical Education



Warm Up Activity: 2 minute run

Strength, Endurance, Cardiovascular, and Flexibility Exercises:
(3-4 minutes)

- | | |
|------------------|--------------|
| 10 push ups | stretches |
| 10 sit ups | skipping |
| 10 jumping jacks | galloping |
| bear walk | kangaroo hop |

Cross the Mid-line Exercises and Minds In Motion:
(3-4 minutes)

1. Windmill
2. Opposite hand/foot touch 10X front/10X back
3. Heel/toe walk-forward 10steps, backwards (toe/heel) 10steps
4. Stand on one foot, opposite arm extended to front, side, and

Physical Activity
(20-30 minutes)

You may choose any physical activity
to complete assignment:

Examples: basketball, soccer, dance, wii fit, jump rope, hula hoop,
running, walking, riding bike, sport practices, etc...

I have completed my physical activity assignment:

Print name

Signature